
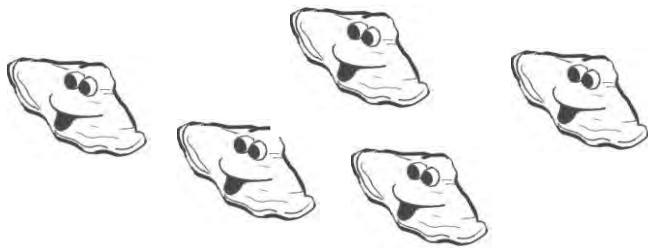


Take Some Away

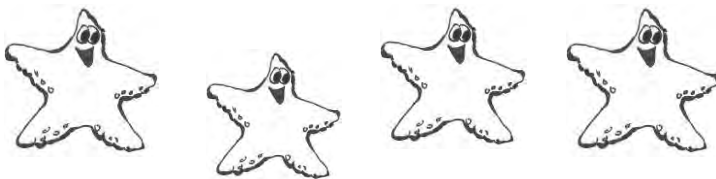
When we take something away from a group it is called **subtraction**. Look at the pictures and sentences below. Put an X on the pictures in each row that you should take away. Write the number on the line to show how many are left.



3 take away 1 is _____



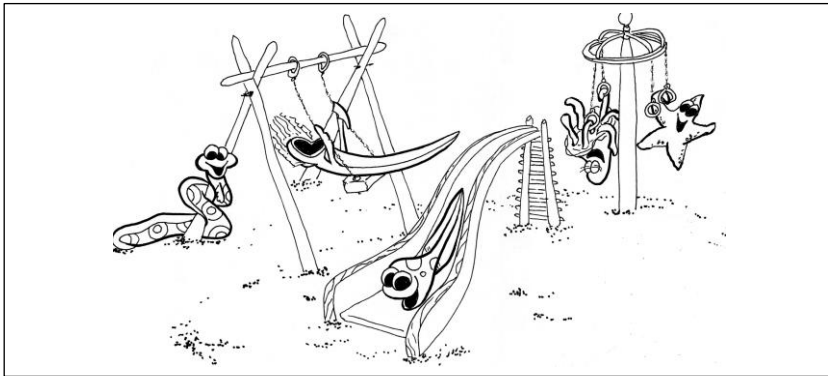
5 take away 2 is _____



4 take away 3 is _____


The Minus Sign

Minus sign: - A minus sign means "take away" or subtract. Put an X on 2 friends to take them away (subtract them). Count to see how many are left.



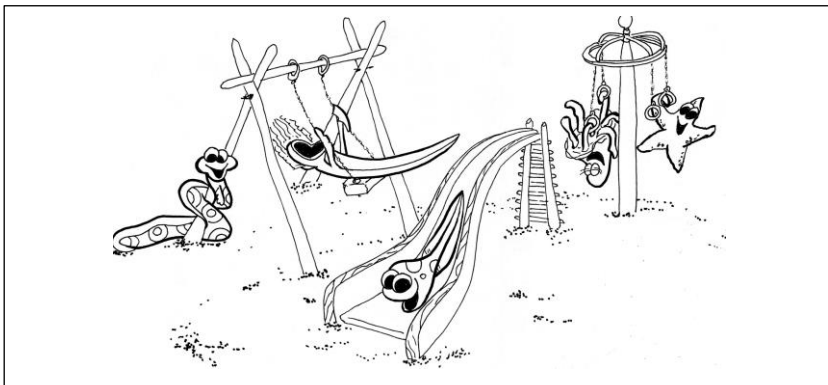
5 take away 2 is 3

$$5 - 2 = \underline{3}$$




4 take away 1 is _____

$$4 - 1 = \underline{\quad}$$



5 take away 4 is _____

$$5 - 4 = \underline{\quad}$$



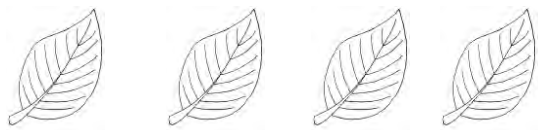
4 take away 2 is _____

$$4 - 2 = \underline{\quad}$$


Get more great items for your child at:
CattailCakes.com

Subtraction Facts

Put an X on the candies to take the right number away. Count how many candies are left to solve the subtraction facts.




$$4 - 1 = \underline{\quad}$$



$$5 - 4 = \underline{\quad}$$



$$3 - 1 = \underline{\quad}$$



$$8 - 4 = \underline{\quad}$$

Get more great items for your child at:
CattailCakes.com